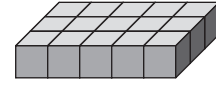




Find Volume of Right Rectangular Prisms

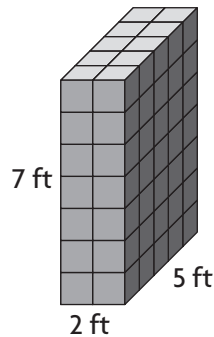
- 1** One layer of 1-inch cubes is shown. If 9 layers are stacked, what is the volume of the right rectangular prism formed by the stack?



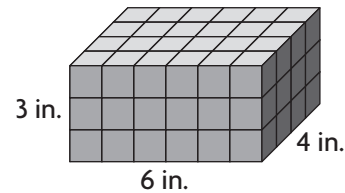
- 2 Math on the Spot** Rich is building a travel crate for his dog, Thomas, a beagle-mix who is about 28 inches long, 14 inches wide, and 22 inches tall. For Thomas to travel safely, his crate needs to be a rectangular prism that is about 12 inches greater than his length and width and 6 inches greater than his height. What is the volume of the travel crate that Rich should build?

Find the volume.

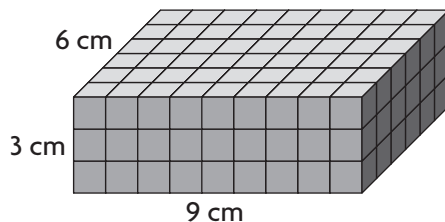
3



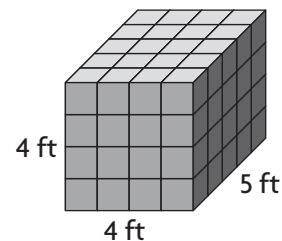
4



5

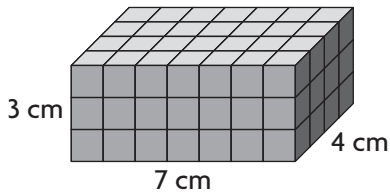


6



Test Prep

- 7 What is the volume of the right rectangular prism?



- 8 Select the volume for each set of dimensions of a right rectangular prism.

	36 cu in.	54 cu in.	72 cu in.
length: 6 in. width: 2 in. height: 3 in.	<input type="checkbox"/>	<input type="checkbox"/>	<input type="checkbox"/>
length: 9 in. width: 3 in. height: 2 in.	<input type="checkbox"/>	<input type="checkbox"/>	<input type="checkbox"/>
length: 4 in. width: 3 in. length: 6 in.	<input type="checkbox"/>	<input type="checkbox"/>	<input type="checkbox"/>
length: 4 in. width: 3 in. length: 3 in.	<input type="checkbox"/>	<input type="checkbox"/>	<input type="checkbox"/>

Spiral Review

- 9 Write a numerical expression to match the words.

Illana has 16 test tubes that she prepares for the science lab. She breaks 2 test tubes. She gives the rest out equally to the 7 lab groups.

- 10 How many cubes are used to make the figure?

